

## दुसरी - गणित (इंग्रजी माध्यम)



Maharashtra Vidya Pradhikaran, Pune-30

Pragat Shaikshanik Maharashtra

Educational Achievement Test

Summative Evaluation 2 : 2016-17

Standard : Second - Subject : Mathematics (Written)

Name of the Student : \_\_\_\_\_

Name of the School : \_\_\_\_\_

Cluster : \_\_\_\_\_ Taluka : \_\_\_\_\_ District : \_\_\_\_\_ Date : / 04 / 2017

Roll No. :  Div. :  Marks obtained :

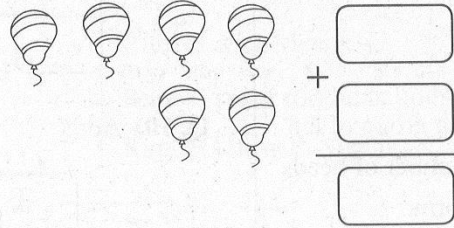
Teacher's Signature : \_\_\_\_\_ Written marks :  20

Each question carries one mark. Solve all questions.

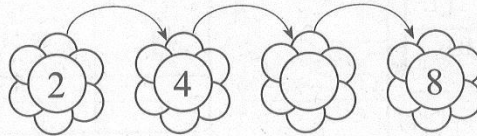
Q. 1) Colour seven mangoes using pencil.



Q. 2) Count balloons. Form addition example and solve.

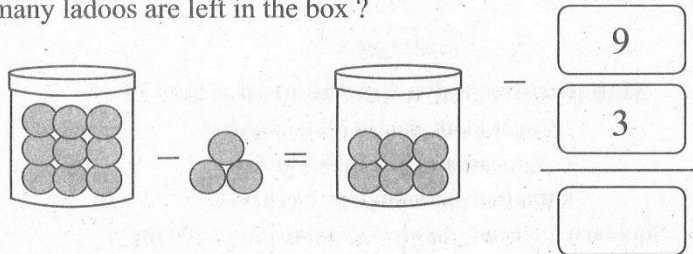


Q. 3) Write the number that comes in stages.



Summative Evaluation 2 : Standard - Second : Subject - Mathematics : (1)


- Q. 4)** There were 9 ladoos in the box. 3 ladoos were distributed to girls. How many ladoos are left in the box ?



- Q. 5)** Write the number which comes after the given number.

18	
----	--

- Q. 7)** Colour the circle in the given picture.




- Q. 9)** Draw a box for a group of ten and write the number of beads in Tens-Units form.

T	U

- Q. 6)** Write the number in words.

16 \_\_\_\_\_

- Q. 8)** Write ✓ symbol below the pan in which the object is heavier.



- Q. 10)** Add.

	T	U
+	4	5
	1	3

**Q. 11)** Subtract.

	T	U
—	5	9
	1	5

**Q. 12)** Subtract.

	T	U
—	2	4
		7

**Q. 13)** Sandhya solved 18 examples and Pankaj solved 14 examples. How many examples did they solve altogether ?

	T	U
+		

Examples solved by Sandhya.

Examples solved by Pankaj.

Total examples solved by both.

**Q. 14)** Meena had 60 Rupees. She bought balloons for Rupees 20. How many Rupees are left with her ?

	T	U
—		

Rupees with Meena.


Rupees spent for the balloons.

Rupees left with Meena.

**Q. 15)** If  $\boxed{\text{○○○}} + \boxed{\text{○○○}} = 3 \times 2$










then  $\boxed{\text{○○○○}} + \boxed{\text{○○○○}} + \boxed{\text{○○○○}} = 4 \times \boxed{\phantom{00}}$

- Q. 16)** How many notes of 20, 10 and 5 Rupee are required to buy a toy of Rupees 50 ? Write number of notes in the respective box.





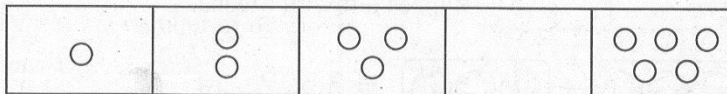

**For Q. 17 and 18 :** Names of students and their favourite fruits are given in the table below. Answer the questions using it.

Students	Like Fruits		
Shabana			
Priya			
Peter			

- Q. 17)** How many students like Mango ?

- Q. 18)** Which fruit do all three students like ? \_\_\_\_\_

- Q. 19)** Complete the pattern.



- Q. 20)** Complete the pattern.

1	3	5	7	
---	---	---	---	--





# प्रथम भाषा : इंग्रजी - इयत्ता : दुसरी



**Maharashtra Vidya Pradhikaran, Pune-30**

**Pragat Shaikshanik Maharashtra**

**Educational Achievement Test**

**Summative Evaluation 2 : 2016-17**

**Standard : Second - Subject : English (Written)**

**Name of the Student :** \_\_\_\_\_

**Name of the School :** \_\_\_\_\_

**Cluster :** \_\_\_\_\_ **Taluka :** \_\_\_\_\_ **District :** \_\_\_\_\_ **Date :** / 04 / 2017

**Roll No. :**

**Div. :**

**Marks obtained :**

**Teacher's Signature :** \_\_\_\_\_

**Written marks.:**

**20**

**Q. 1. Listen and Write.**

**(5 Marks)**

1) \_\_\_\_\_ 2) \_\_\_\_\_

3) \_\_\_\_\_ 4) \_\_\_\_\_

5) \_\_\_\_\_ 6) \_\_\_\_\_

7) \_\_\_\_\_ 8) \_\_\_\_\_

9) \_\_\_\_\_ 10) \_\_\_\_\_

**Q. 2.** Observe the following pictures. Write about the activities shown in these pictures. (5 Marks)

1.



---

---


2.



---

---


3.



---

---

4.



---

---

5.




---



---

**Read the given passage.**

Ira loved to talk. She was always telling her friends about what she had to do to come to school every day. "But you come to school in an auto-rickshaw with your friends," said Neha.

"That's right," said Ira. "I come to my Granny's place and from there I come in an auto-rickshaw. But my home is far away from my Granny's place. Do you know how I travel everyday from my home?" "I told you my home is very far away. I have to cross a mountain, a sea and a forest every day to come to school."

**Now answer the following questions. (5 Marks)**

**Q. 3.** What did Ira love ? (Circle the correct answer.) (1 Mark)

- a) to paint the pictures      b) to talk      c) to study

**Q. 4.** Ira used to come to school..... (Circle the correct answer.) (2 Marks)

- a) in an auto rickshaw  
b) in an aeroplane  
c) by bus

**Q. 5.** Do you believe that Ira's home was far away ? Why ? (2 Marks)

---



---



---



**Q. No. 6 and 7 : Replace the underlined words with the words given in the brackets. Rewrite the sentences correctly.**

**Q. 6.** I have a pen. (five) (1 Mark)

---


**Q. 7.** Meena has a red rose. (I) (1 Mark)

---

**Q. 8.** Frame a sentence using word 'friend'. (1 Mark)

---

**Q. 9.** Teacher is teaching in the class. Write any two questions that you would like to ask him about his work. (2 Marks)



---

---

---

---

